

BAHASA INDONESIA TEST (AGE 10 - 12)

DEPARTMENT OF EDUCATION AND CULTURE

**BUREAU OF RESEARCH AND DEVELOPMENT IN EDUCATION AND CULTURE
OFFICE OF RESEARCH AND DEVELOPMENT FOR TESTING SYSTEMS**

a collaborative project with

**THE DEMOGRAPHIC INSTITUTE, FACULTY OF ECONOMICS,
UNIVERSITY OF INDONESIA**

1996

1. Uncle Inu was explaining a way to plant tomatoes and chili that conserves water. The method requires making a small mound and covering it with black plastic. The tomato and chili are planted in a hole in the plastic. Your first impression from the paragraph above is ...

- A. an introduction to tomatoes and chili
- B. how to plant tomatoes and chili
- C. use black plastic to cover earth
- D. a place to plant chili

2. Banu was walking very fast, the sun was very hot and burnt his skin. Banu was imagining a refreshing glass of sweet juice with ice ...

The appropriate sentence to complete the paragraph above ...

- A. Banu was hot and thirsty.
- B. Banu had a headache that really hurt.
- C. Banu had run out of money on his trip.
- D. Banu was afraid of being rained on.

3. Rima did not go directly home when school was finished. Rina was bad because ...

- A. She wasted her money while out
- B. She wasted her energy
- C. She made her parents worry
- D. She broke the rules

4. Father : "Good afternoon, Doctor"
Doctor : "Good afternoon! Who is sick?"
Father : "Andi, Mr. Doctor."
Doctor : "Okay, I will examine him in a moment.
Here, take off your shirt, Andi!
In order for Andi to get well, he only needs a shot, right?"

The contents of the conversation above were ...

- A. The father is talking to the doctor.
- B. Andi wants to go to the doctor with his father.
- C. Andi wants a shot from the doctor.
- D. Andi was in the process of getting treated by the doctor because he was sick.

5. Mira :
Tari : 'Good morning! Yes, it's me!'
Mira : "Mira can we go to the hospital to check on Nana?"
Tari : "Yes, what time?"
Mira : "Now is okay!"
Tari : "Good, I will wait at the security post!"

The sentence that appropriately completes the above conversation is ...

- A. "Good morning, who is it?"
- B. "Good morning, who am I speaking with?"
- C. "Good morning, may I please speak with Tari!"
- D. "Good morning, hi Tari!"

6. A. B.

C.

The pictures above will make a good story if arranged as ...

- A. A - B - C
- B. B - A - C
- C. C - B - A
- D. C - A - B

7. My mother asked me if I had already read that book.
Use two incorrect words with the above sentence ...

A. Mother, to me
B. have, already
C. asked, reading
D. to me, story

8. Guest, "Good evening, Is Pak Kusdi there?"
Child : ...!
Guest : "Thank you, Child!"

The sentence which completes the above paragraph ...

A. "He is here, please wait a moment!"
B. "He is here, he has a guest!"
C. "He is here, what do you want?"
D. "He is here, look for him yourself!"

9. Anwar : "If you want to practice, tell the campers to come to my house, first?"
Nana : "Should we practice this afternoon, Anwar?"
Anwar : "According to Udi, we need to practice making knots".
Bonar : "Practice waving the flag, Nan!"
Nana : "Where do you know that from?"
Bonar : "From Ms. Cik."
Anwar : "Are you sure? We will leave together later this afternoon okay!"
Bonar : "Okay, Anwar! Later I will come to your house!"

The theme of the above conversation is ...

A. practice knots
B. practice flag waving
C. practice with knots and flags
D. camping scouts practice

10. (1) Buyer : "How much is ten mangos, Madam?"
(2) Seller : "They are Rp 1,500 per Kilo!"
(3) Buyer : "One Kilo is Rp 1,500! That is so expensive!"
(4) Seller : "They are cheap! These mangos are from Manalaji and very sweet."

From the above conversation, the sentence which describes the mango is number ...

- A. 1
- B. 2
- C. 3
- D. 4

11. ...
10 years ago he was laying there,
but he was not asleep, dear
a round hole the shape of a bullet was on his chest
his frozen smile wanted to say
I am very young
...

The poem above is about ...

- A. A young person laying down imagining a war that happened 10 years ago.
- B. A young person who was injured in the chest and is lying down, smiling, during a war.
- C. A fighter who died because of a chest wound during a war that happened 10 years ago.
- D. A young person who is sleeping with an injured chest.

12. Ani bought a book. Tari wanted to know the price of the book Ani bought.

The sentence Tari should use for asking is ...

- A. How many books did you buy?
- B. What is the price of the book you bought?
- C. Where did you buy that book?
- D. When did you buy that book?

13. (1) Kotanya berbukut-bukut dan sejuk.
(2) I enjoy visiting Grandma's house.
(3) When vacation arrives.
(4) I will visit Grandma in Ambon.

Rearrange the above sentences so they become correct sentences, the order should be ...

- A. 2 - 3 - 1 - 4
- B. 3 - 2 - 4 - 1
- C. 3 - 4 - 1 - 2
- D. 4 - 2 - 1 - 3

14.

A.

B.

A sentence which accurately describes the picture above is ...

- A. The plants (a) and (b) have multiple and single leaves.
- B. The plant (a) has one leaf, while plant (b) has multiple leaves.
- C. Both types of plants have one leaf and multiple leaves.
- D. One plant has one leaf and one plant has multiple leaves.

15. The head of class V was given the task of announcing to his/her friends that the class would do voluntary public service on Saturday. The students were told to bring the appropriate tools for cleaning.

The appropriate sentence announcing this to the class is ...

- A. Children, bring the public service tools that will be used on Saturday.
 - B. Friends, the class representative announces that on Saturday will conduct public service.
 - C. Friends, the class representative has ordered us to bring cleaning tools.
 - D. Friends, on Saturday we will do public service. For this reason, each student should bring something with which he or she can clean!
16. "... my child, who lays there, the hurricane will sink its body and head in the ocean which is deep and wide. You, with all your possessions, will be buried in the ocean," the mother promised.

...

The story above is about ...

- A. A mother who is angry with her child.
- B. A mother who is giving advice to her child.
- C. A mother who is missing her child.
- D. A mother who is worried about her child.

17. "She is not my mother, she is a poor person and I am very rich. It is not possible for her to be my mother," said Dampo Awang. "I am embarrassed to have a mother who is a beggar like her."

"How dare you talk like that," said the first sibling to Dampo Awang. "She is truly our mother, the woman who gave birth to us. We must acknowledge this. She is our biological mother."

The contents of the story is ...

- A. Don't forget your parents even if you become a success.
 - B. We should always remember our parents' service to us.
 - C. Children should always reciprocate the good intentions of their parents.
 - D. We cannot treat our parents poorly.
18. Prior to making a paper toy we need to ...
- A. stick the toy to the empty paper
 - B. prepare glue and paper
 - C. hold onto the thin side of the toy
 - D. clean up the toy and then stick it

19. The Extended Family of Haryo Kusuma
Will conduct a ceremony to commemorate
The Graduation of their child, Permana,
from the University of Indonesia

Day/Date : Sunday, 29 September 1996
Time : at 10.00 West Indonesia time until it is over
Place : St. Sisingamangaraja 73
South

We look forward to your attendance.

Signed
Haryo Kusuma

The sentence which completes the above sentence is ...

- A. We will wait for you to attend, sir or madam
 - B. We urge you to attend, sir or madam
 - C. We hope you will attend, sir or madam
 - D. we ask you to attend, sir or madam
20. (1) Pak Badu's cows are given food and drink regularly.
(2) Each night the cows are put in the stall.
(3) Pak Badu takes care of the cows.
(4) Pak Badu cows are fat and healthy.

The proper order of the above sentences is ...

- A. 4 - 3 - 1 - 2
- B. 2 - 3 - 1 - 4
- C. 1 - 4 - 3 - 2
- D. 3 - 1 - 4 - 2

21. Pak Badu's cows are healthy and fat.

Connect the words which are similar to the words about Pak Badu's cow in the following sentence ...

- A. Chickens like small insects.
- B. Pak Ali takes care of Bangkok chicken.
- C. The guard dog is mean.
- D. Ani borrowed my book yesterday.

22. We did not see the roots of the mango, guava or corn plant.
These roots are in the ground.
... , there are also roots which are above ground, for example beringin trees.

Which is appropriate for the blank above ...

- A. However
- B. and
- C. because
- D. other than

23. The best structure for the essay is ordered like ...

- A. Holiday
 - 1. at grandma's house
 - 2. buy a ticket
 - 3. save
 - 4. gift for grandma
- B. Holiday
 - 1. gift for grandma
 - 2. savings
 - 3. holiday
 - 4. grandma's house
- C. Holiday
 - 1. grandma's house
 - 2. gift for grandma
 - 3. savings
 - 4. buy ticket
- D. Holiday
 - 1. savings
 - 2. gift for grandma
 - 3. buy ticket
 - 4. at grandma's house

24. My Grandma's house is small ... the yard is big.
The appropriate connecting word for the sentence above is ...

- A. and
- B. , but
- C. because
- D. even though

25. People were killed and five were seriously injured, as a result of two accidents which happened on the road to West Subang beach on Saturday.

The contents of the news above is ...

- A. There were deaths from the accident on the road to West Subang beach
- B. Something happened on the road to West Subang beach
- C. Results from the accident on the road to West Subang beach
- D. An accident happened on the road to West Subang beach

26.

A good sentence for the poster, according to the picture above is ...

- A. GATSBY protects hair from the rays and heat of the sun.
- B. Buy GATSBY hair oil.
- C. GATSBY hair oil is everywhere.
- D. Father likes GATSBY, mother also likes GATSBY.

27. Dewi Melati, my youngest sister, is always teased by her two older siblings. This makes her very sad.

"Ha ha ha ... look at Melati's husband walking like a ball rolling. ...," yelled the oldest sibling.

"Yes, yes ... he is ugly and his body has no shape either. Is it true that Melati searched for him?" yelled the older brother.

The attitude of Melati's two older brothers is ...

- A. snobbish
- B. annoying
- C. evil
- D. ugly

28. Moving many times from place to place was the custom of primitive people.

The word primitive means ...

- A. not yet advanced
- B. no extras
- C. not much action
- D. never been to school

29. Which sentence is correct ...

- A. Ani likes looking at the stars in the sky all day and night.
- B. My finger was given a star symbol because my finger nail is long
- C. She is destined to become a star student because she is a serious and diligent student
- D. Lontin Ati took the shape of a star but lost it when swimming.

30.

Date: 01/08/96	
Received from	_____ (1) _____
The amount of	_____ (2) _____
To pay for	_____ (3) _____
<div style="border: 1px solid black; padding: 2px;">Rp (4)</div>	Bahasi 15-9-96 (Signed)

The appropriate contents of the above receipt is ...

- A.
 - 1. Ali
 - 2. Rp 2,000,000,-
 - 3. a cooperative effort making palettes
 - 4. 2 million Rp
- B.
 - 1. Laborer
 - 2. Rp 2,000,000,-
 - 3. a cooperative effort making palettes
 - 4. 2 million Rp
- C.
 - 1. Ali
 - 2. 2 million Rp
 - 3. a cooperative effort making palettes
 - 4. 2,000,000,-
- D.
 - 1. Laborer
 - 2. Rp 2,000,000,-
 - 3. a cooperative effort making palettes
 - 4. Rp 2,000,000,-

ANSWER KEY

1. B

2. A

3. C

4. D

5. C

6. C

7. C

8. A

9. D

10. D

11. C

12. B

13. C

14. B

15. D

16. A

17. A

18. B

19. C

20. D

21. D

22. A

23. D

24. B

25. A

26. A

27. A

28. A

29. C

30. C

BAHASA INDONESIA TEST (AGE 7 - 9)

DEPARTMENT OF EDUCATION AND CULTURE

**BUREAU OF RESEARCH AND DEVELOPMENT IN EDUCATION AND CULTURE
OFFICE OF RESEARCH AND DEVELOPMENT FOR TESTING SYSTEMS**

a collaborative project with

**THE DEMOGRAPHIC INSTITUTE, FACULTY OF ECONOMICS,
UNIVERSITY OF INDONESIA**

1996

HELPING THE CAT

Ali was playing in front of the house.
Suddenly Ali heard the voice of a kitten.
The kitten had plunged into the sewer.
It's body was wet and smelled of mud.
Ali felt sympathetic looking at the cat.
He lifted the cat and washed it
with soap so it would be clean.
Each day the cat was given food and
drink.
Now it is healthy and fat.
Ali called it Si Belang.

Answer according to the contents of the reading!

1. What did Ali do when he realized the kitten had plunged into the sewer?
 - A. helped
 - B. lifted
 - C. felt sympathetic
2. How did Ali clean that kitten?
 - A. wash with soap so that it would be clean
 - B. clean off the mud
 - C. bathe until clean
3. According to you, how was Ali's behavior?
 - A. clever
 - B. good
 - C. diligent

4.

Check the correct answer!

The woman is ... rice

- A. frying
- B. placing
- C. stirring

5. i - ng - t - l - e - a

These letters can be arranged to become a word, that is ...

- A. tilenga
- B. talinge
- C. telinga

(Note: telinga means ear and is correctly spelled. The other two words are meaningless)

6. A child kicked the ball with ...

- A. a piece of wood
- B. her foot
- C. her shoes

7. The flower jasmine is the color ...

- A. yellow
- B. white
- C. red

8. Buys - chicken - egg - one/Mother

Use these words to construct a sentence

The correct sentence from the words is ...

- A. Mother buys one chicken egg.
- B. Mother buys an egg of one chicken.
- C. Mother buys a chicken of one egg.

9. You made a mistake because you dropped your friend's bag.

The correct sentence for apologizing is ...

- A. Forgive me because I dropped your bag!
- B. Sorry, I will return your bag!
- C. Sorry, I took the bag from your drawer!

10.

Ali enjoys playing ...

- A. ball
- B. rope
- C. marbles

11.

The sentence that matches the above picture is ...

- A. Mr. Farmer is washing his hoe.
- B. The farmer is plowing his field.
- C. The farmer is hoeing his field.

12. A person who exchanges money for something they want is called ...
A. a buyer
B. a seller
C. a service worker
13. Nana always buys snack food on the side of the road.
This makes Nana bad, because ...
A. disturbs traffic
B. food from the roadside is dirty
C. her parents will get mad if they see this
14. tuti went to jakarta in the month of januari.
The words that needed to be capitalized are ...
A. Tuti, Jakarta, Month
B. To, Jakarta, January
C. Tuti, Jakarta, January
15. The younger sibling swept the floor
The instruction in which the above sentence is based on is ...
A. Sweep that floor!
B. That floor sweep!
C. Sweep floor that!
- 16.

The sentence which matches the above picture is ...

- A. Ibu is serving food.
B. Ibu is placing food.
C. Ibu is checking the food.

17. That monkey ... happily if he gets a nut from Musa.
- A. runs around
 - B. swings around
 - C. straddles

18. ani and budi study in bandung.
Should be written as ...
- A. Ani and budi study in bandung
 - B. Ani and Budi study in bandung
 - C. Ani and Budi study in Bandung

19. Tuti steamed the cake
... was steamed by Tuti?

The correct question word to complete the above sentence ...

- A. what
 - B. who
 - C. why
20. Nana was carrying Rp 100,-
... money was Nana carrying?
- A. what
 - B. how much
 - C. who
21. What is the correct positioning of the period?
- A. At 7.0.0 o'clock the entry bell sounded.
 - B. At 7.00 o'clock the entry bell sounded.
 - C. At 7.0.0. o'clock the entry bell sounded.
22. "Child, please do not go. First, your mother is old. Second, I do not have money to pay for your trip."
The subject of the story is ...
- A. rich
 - B. poor
 - C. old

23. My - musa - friend - study - diligent - whose - is name
The correct order of the sentence is ...

A. Whose name is Musa is diligent studying my friend.
B. Whose name is Musu my friend studying.
C. My friend, whose name is Musa, is diligent at studying.

24. 1. The city is full of hills and cool.
2. When vacation arrives.
3. I will visit my grandmother in Wonosobo
Rearrange the sentences to make a good story ...

A. 3 - 1 - 2
B. 2 - 3 - 1
C. 1 - 3 - 2

25. "She is not my mother, she is a poor person while I am very rich. There is no way she is my mother," said Dampo Awang.
I am ashamed to have a begger like her for a mother."

Dampo Awang tells the above story with the attitude ...

A. arrogant
B. shy
C. mad

26. Musa : ...
Grandfather : Oh, Musa!
Musa : What is grandpa doing?
Grandfather : I am fertilizing the orange tree!

The appropriate greeting sentence which completes the above conversation is ...

A. Here, Gramps!
B. Hey Grampa!
C. Good morning, Grandpa!

27. Toto : Do you want to study with me?
Banu : ...

If Banu does not agree, the appropriate answer is ...

- A. Don't want!
- B. I don't want to study with you!
- C. Sorry, today I am not able to study with you.

28. One day Ike was walking very fast.
She was looking at the dark clouds in the sky. It looked as if in a moment rain would fall ...

The appropriate sentence to complete the story above is ...

- A. Ike did not want to get rained on in the street.
- B. The day was becoming night.
- C. Ike wanted to go home fast.

29. Which of these tables is most accurate? ...

A.

Number	Student's Name	Origin
1	Didi	Men
2	Mira	Women
3	Titi	Women
4	Safari	Men
5	Nunung	Women

B.

Number	Student's Name	Class
1	Didi	Kindergarten
2	Mira	Elementary
3	Titi	Jr. High
4	Safari	Elementary
5	Nunung	Kindergarten

C.

Number	Student's Name	Age
1	Didi	8, 5 years
2	Mira	8 years
3	Titi	9 years
4	Safari	9 years
5	Nunung	8 years

30.

Jakarta, 30 September 1996

To
The representative of Class IIIA of the School

.....

With this letter, I inform you that I was unable to attend school because I was sick.

I am therefore requesting permission to not attend school.
I thank you for your attention to this matter.

Banu

The letter above should be completed with ...

- A. Best regards,
- B. Hello, good morning,
- C. With respect,

ANSWER KEY

1. A

2. C

3. B

4. A

5. C

6. B

7. B

8. A

9. A

10. A

11. B

12. A

13. B

14. C

15. A

16. A

17. C

18. C

19. A

20. B

21. B

22. B

23. C

24. B

25. A

26. C

27. C

28. A

29. C

30. C

MATHEMATICS TEST (AGE 10 - 12)

DEPARTMENT OF EDUCATION AND CULTURE

**BUREAU OF RESEARCH AND DEVELOPMENT IN EDUCATION AND CULTURE
OFFICE OF RESEARCH AND DEVELOPMENT FOR TESTING SYSTEMS**

a collaborative project with

**THE DEMOGRAPHIC INSTITUTE, FACULTY OF ECONOMICS,
UNIVERSITY OF INDONESIA**

1996

1.
$$\begin{array}{r} 4,169 \\ 29,934 \\ \hline \end{array} +$$

 \dots

- A. 34,103
- B. 34,093
- C. 33,103
- D. 33,093

2. $12,597 + n = 47,925$
 $n = \dots$

- A. 34,428
- B. 35,428
- C. 35,328
- D. 36,328

3. $4,516 \div 4 = \dots$

- A. 1,024
- B. 1,029
- C. 1,124
- D. 1,129

4. $2 \text{ km} + 2 \text{ hm} + 20 \text{ dm} + 12.5 \text{ m} + 4 \text{ cm} = \dots \text{ cm.}$

- A. 22,454
- B. 22,354
- C. 24,229
- D. 241,254

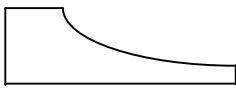
5. $\frac{56}{84} = \dots$

- A. $\frac{4}{7}$
- B. $\frac{2}{3}$
- C. $\frac{3}{4}$
- D. $\frac{5}{6}$

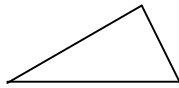
6. $3.5 \text{ tonnes} + 2.5 \text{ decatonnes} + 105 \text{ kg} = \dots \text{ kg}$

- A. 3,855
- B. 3,805
- C. 3,755
- D. 3,705

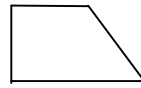
7.



I



II



III



IV

Which of the figures above is symmetric? ...

- A. I
- B. II
- C. III
- D. IV

8. Which one of these numbers can be divided by 3 and 5 ...

- A. 9
- B. 10
- C. 15
- D. 20

9. $\frac{1}{3} - \frac{1}{6} = \dots$

- A. $\frac{2}{3}$
- B. $\frac{1}{3}$
- C. $\frac{1}{6}$
- D. $\frac{1}{9}$

10. Budi bought one dozen marbles, his father bought 2 dozen marbles and his mother bought a half dozen. What is Budi's total?

A. 30
B. 36
C. 42
D. 48

11. $105,064 \div 23 = \dots$

A. 4,556
B. 4,558
C. 4,566
D. 4,568

12. A square has an area of $2,025 \text{ cm}^2$. What is the length of one side in cms?...

A. 25
B. 35
C. 45
D. 55

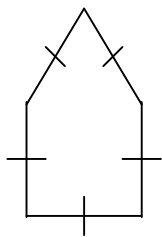
13. What is $\frac{1}{7}$ in decimals ...

A. 0,142877
B. 0,142857
C. 0,142867
D. 0,142947

14. $(412 + 213) \div (243 - 118) = \dots$

A. 125
B. 75
C. 25
D. 5

- 15.



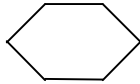
In the figure, each side is 12 cm. How far is it all the way around ...

A. 72
B. 60
C. 58
D. 56

16. $\frac{2}{3} \times 1\frac{5}{7} \div \frac{1}{7} = \dots$

- A. $\frac{1}{8}$
- B. $\frac{1}{3}$
- C. 3
- D. 8

17.



How many symmetries are in the picture here ...

- A. 6
- B. 4
- C. 3
- D. 2

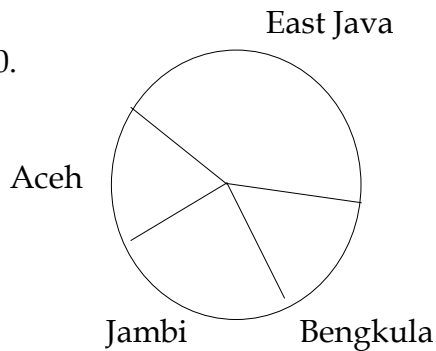
18. $0.76 - 0.4 - 0.23 = \dots$

- A. 0.11
- B. 0.12
- C. 0.13
- D. 0.16

19. $0.6 + 20\% - 0.2 - 10\% = \dots$

- A. 0.9
- B. 0.8
- C. 0.6
- D. 0.5

20.



The diagram shows population in provinces.
Which province has the highest population...

- A. Aceh
- B. Bengkulu
- C. East Java
- D. Jambi

21. What is the primary factor for 2,520...
- A. $2^2 \times 3^2 \times 5^2 \times 7$
 - B. $2^3 \times 3^2 \times 5 \times 7$
 - C. $2^2 \times 3 \times 5^2 \times 7$
 - D. $2 \times 5 \times 7$
22. J, F and I were playing marbles. Each one had the following proportion of marbles 3 : 5 : 7. If J has 60 marbles, how much do F and I have?
- A. 100
 - B. 140
 - C. 200
 - D. 240
23. The distance between city A and city B on the map is 3.5 cm. If the scale of the map is 1 : 200,000, the real distance is ...
- A. 70 m
 - B. 700 m
 - C. 7,000 m
 - D. 70,000 m
24. A car was traveling at 60 km/hour. How much time would it take for the car to travel 160 km ...
- A. 2 hours 20 minutes
 - B. 2 hours 30 minutes
 - C. 2 hours 40 minutes
 - D. 2 hours 50 minutes
25. Which coordinates are appropriate ... if $(x + y = 12)$
- A. (-5, -7)
 - B. (5, -7)
 - C. (-5, 7)
 - D. (5, 7)
26. Ali bought a motorcycle for Rp. 1,750,000.00. He wants to sell for a profit of 15%. His profit should be would be ...
- A. Rp 150,000.00
 - B. Rp 245,000.00
 - C. Rp 262,500.00
 - D. Rp 350,000.00

27. A cone has a base diameter of 54 cm. If the height is 100 cm, what is the volume?
- A. 76.302 cm³
 - B. 114.453 cm³
 - C. 152.604 cm³
 - D. 228.906 cm³
28. $\frac{2}{3} \div \frac{2}{7} = \dots$
- A. $\frac{4}{21}$
 - B. $\frac{3}{7}$
 - C. $1\frac{1}{6}$
 - D. $2\frac{1}{3}$
29. A circular flower garden has a radius of 21 meters. At the center of the garden is a pond 7 meters from the edge of the garden.
- The circumference of the pond is ... (Assume π is $= \frac{22}{7}$)
- A. 44 m
 - B. 88 m
 - C. 132 m
 - D. 154 m
30. What is the average of the following numbers: 5 6 7 4 7 6 5 5 4 4 ...
- A. 6.3
 - B. 6.2
 - C. 5.3
 - D. 5.2

ANSWER KEY

1. A

2. C

3. D

4. D

5. B

6. A

7. D

8. C

9. C

10. C

11. D

12. C

13. B

14. D

15. B

16. D

17. C D?

18. C

19. D

20. C

21. B

22. D

23. B C?

24. C

25. D

26. C

27. A

28. D

29. B

30. C

MATHEMATICS TEST (AGE 7 - 9)

DEPARTMENT OF EDUCATION AND CULTURE

**BUREAU OF RESEARCH AND DEVELOPMENT IN EDUCATION AND CULTURE
OFFICE OF RESEARCH AND DEVELOPMENT FOR TESTING SYSTEMS**

a collaborative project with

**THE DEMOGRAPHIC INSTITUTE, FACULTY OF ECONOMICS,
UNIVERSITY OF INDONESIA**

1996

1. Tini bought 10 pencils. Tono bought 15 pencils. How many pencils were bought by Tini and Tono ...

A. 10
B. 15
C. 20
D. 25

2. Length of the piece of wood = ... how many matches.

A. 5
B. 6
C. 7
D. 8

3. $29 - 7 = \dots$

A. 20
B. 21
C. 22
D. 23

4. The picture that is a rectangle is ...

A.

B.

C.

D.

5. $65 = \dots$
- A. sixty + fifty one
 - B. fifty + sixty one
 - C. sixty five
 - D. six five 1
6. $49 - 23 = \dots$
- A. 25
 - B. 26
 - C. 27
 - D. 28
7. Amir has 26 male and 53 female chickens. What is the total number of chickens and roosters owned by Amir ...?
- A. 67
 - B. 69
 - C. 77
 - D. 79
8. $75 - 47 = \dots$
- A. 25
 - B. 26
 - C. 27
 - D. 28
9. Ibu bought 60 chicken eggs. When she arrived at home 12 were broken. The number of unbroken eggs is ...
- A. 38
 - B. 48
 - C. 52
 - D. 58
10. Aisyah had Rp 500. She bought cake that cost Rp. 350. She had Rp. ... left.
- A. 100
 - B. 150
 - C. 200
 - D. 250

11. $370 + 419 = \dots$

- A. 769
- B. 779
- C. 780
- D. 789

12. This picture shows the time is ... o'clock

- A. 4
- B. 6
- C. 8
- D. 12

13. $456 - 223 - 219 = \dots$

- A. 14
- B. 15
- C. 16
- D. 17

14. $267 - 112 - 189 = \dots$

- A. 180
- B. 188
- C. 190
- D. 198

15. On average the height of a house door is about ...

- A. 1 meter
- B. 2 meter
- C. 3 meter
- D. 4 meter

16. One notebook cost Rp. 325. How many books did Tini buy if she spent 975 Rp.?

- A. 2 books
- B. 3 books
- C. 4 books
- D. 5 books

17. $(8 + 7) \times 3 = \dots$

- A. 36
- B. 39
- C. 42
- D. 45

18. Which diagram does not have four sides?

A.

B.

C.

D.

19. The shaded area in the picture is what fraction of the whole?

A. 1

B. $\frac{1}{3}$

C. $\frac{1}{2}$

D. $\frac{1}{4}$

20. The first page is as wide as 4 squares.

The second page is as wide as how many squares?

- A. 36
- B. 33

- C. 30
- D. 27

21. Two thousand eight hundred and fifty two is written ...

- A. 2,650
- B. 2,850
- C. 2,852
- D. 2,855

22. The value of the 5 element in 4,956 is in

- A. thousands
- B. hundreds
- C. tens
- D. units

23.
$$\begin{array}{r} 413 \\ 269 - \\ \hline \end{array}$$

...

- A. 144
- B. 154
- C. 244
- D. 254

24. Father had 5,000 Rp. which he divided among his 4 children. How much did each child get?

- A. 1,000 rupiah
- B. 1,100 rupiah
- C. 1,150 rupiah
- D. 1,250 rupiah

25. $\frac{5}{6} - \frac{3}{6} =$

A. $\frac{1}{6}$

B. $\frac{2}{6}$

C. $\frac{3}{6}$

D. $\frac{8}{6}$

26. It is now one and a half hours before what time?

A. 12:30

B. 11:30

C. 10:30

D. 9:30

27. The stairs were 3 meters long, the stick was 15 dm and the pencil was 30 cm therefore ...

A. length of the stairs = 3 times as long as the stick

B. length of the stairs = 20 times longer than the pencil

C. length of the stick = 5 times the pencil

D. length of the stick = 2 times the stairs

28. 2 lbs + 15 ozs = ... ozs

A. 5

B. 15

C. 25

D. 47

29. Ibu bought 1 kg of sugar at Rp 1,200.00 and $\frac{1}{2}$ kilo of coffee at 2,500.00. If Ibu buys with a Rp 10,000.00 bill, her change would be ...

A. Rp 3,700.00

B. Rp 6,300.00

C. Rp 6,700.00

D. Rp 7,300.00

30. 29
 9
 — x
 ...

- A. 241
- B. 251
- C. 261
- D. 271

ANSWER KEY

1. D

2. B

3. C

4. B

5. A

6. B

7. D

8. D

9. B

10. B

11. D

12. C

13. A

14. C

15. B

16. B

17. D

18. A

19. D

20. A

21. C

22. C

23. A

24. D

25. B

26. C

27. C

28. D

29. B

30. C